

### Ordering objects and numbers


1 Suki and Tim have some sweets.



a) How many sweets does Tim have?


How many sweets does Suki have?

b) Who has more sweets?



2 has more sweets.

c) Here are Mo's sweets.



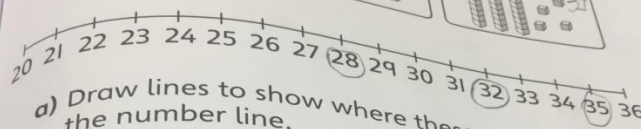
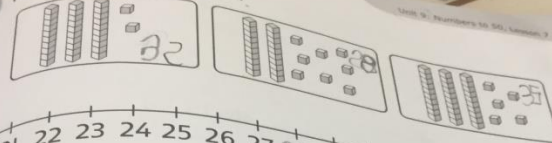
Use the names to complete the sentences.

Suki      Mo      Tim

20 Tim has the most sweets.

10 Mo has the fewest sweets.

2 Here are 3 numbers.



a) Draw lines to show where these numbers go on the number line.

b) Order the numbers from smallest to largest.  
 ,  ,

3 Order the numbers from smallest to largest.

,  ,

4 Order the numbers from largest to smallest.

,  ,  ,

**Aiman**