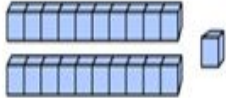

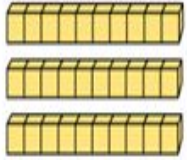


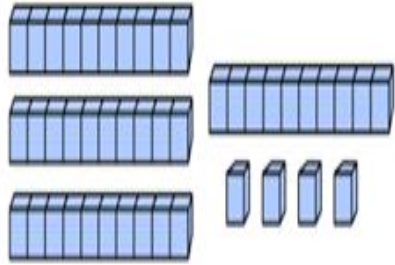
Make and Count



Make the amount shown with multilink cubes. Count them. Then complete the sentences below. The first one has been completed for you.

| Make | Count | Complete |
|--|---------------------------------|--|
|  | 21 | There are 2 tens. There is 1 one. |
|  | <input type="text" value="15"/> | There is 1 ten. There are <input type="text" value="5"/> ones. |
|  | <input type="text" value="30"/> | There are <input type="text" value="3"/> tens. There are <input type="text" value="0"/> ones. |

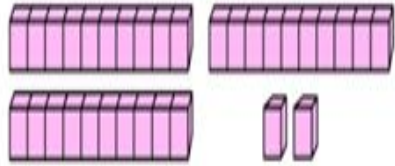
| | | | | | | | | | |
|----|----|----|----|----|----|----|----|----|----|
| 1 | 2 | 3 | 4 | 5 | 6 | 7 | 8 | 9 | 10 |
| 11 | 12 | 13 | 14 | 15 | 16 | 17 | 18 | 19 | 20 |
| 21 | 22 | 23 | 24 | 25 | 26 | 27 | 28 | 29 | 30 |
| 31 | 32 | 33 | 34 | 35 | 36 | 37 | 38 | 39 | 40 |
| 41 | 42 | 43 | 44 | 45 | 46 | 47 | 48 | 49 | 50 |



44

There are 4 tens.

There are 4 ones.



32

There are 3 tens.

There are 2 ones.

| | | | | | | | | | |
|----|----|----|----|----|----|----|----|----|----|
| 1 | 2 | 3 | 4 | 5 | 6 | 7 | 8 | 9 | 10 |
| 11 | 12 | 13 | 14 | 15 | 16 | 17 | 18 | 19 | 20 |
| 21 | 22 | 23 | 24 | 25 | 26 | 27 | 28 | 29 | 30 |
| 31 | 32 | 33 | 34 | 35 | 36 | 37 | 38 | 39 | 40 |
| 41 | 42 | 43 | 44 | 45 | 46 | 47 | 48 | 49 | 50 |